

Name: _____


Date: _____

Apple Picking Number Bonds

Subtraction Within 20


Find the missing number in the number bond.
Then write a subtraction sentence.

1.



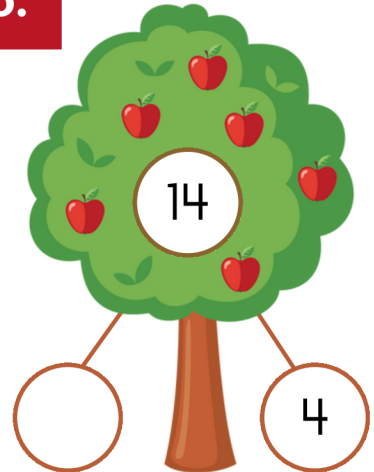
$$\underline{\quad} - \underline{\quad} = \underline{\quad}$$

2.




$$\underline{\quad} - \underline{\quad} = \underline{\quad}$$

3.




$$\underline{\quad} - \underline{\quad} = \underline{\quad}$$

4.




$$\underline{\quad} - \underline{\quad} = \underline{\quad}$$

5.



$$\underline{\quad} - \underline{\quad} = \underline{\quad}$$

6.



$$\underline{\quad} - \underline{\quad} = \underline{\quad}$$